





# The Path that Sperm Travel

## The Path that Sperm Travel

Chain of Events	Write a paragraph using the chain words in order to describe what happens at each step.
<p data-bbox="363 584 464 618">Testis</p>  <p data-bbox="323 842 504 875">Epididymis</p>  <p data-bbox="300 1099 528 1178">Vas deferens (sperm duct)</p>  <p data-bbox="248 1402 579 1480">3 Semen-producing Glands</p>  <p data-bbox="352 1697 475 1731">Urethra</p>	